


The turtles are having a race. After 10 minutes each turtle has moved toward the finish line, which is 16 feet away.



Rewrite each fraction with a common denominator of 16, then shade the distance each has gone and circle the winner.




1



$\frac{5}{8}$ of the way




2



$\frac{3}{4}$ of the way




3



$\frac{11}{16}$ of the way




4



$\frac{7}{8}$ of the way



5



$\frac{1}{2}$ of the way