

1 Write the numbers in standard form.

three thousand, eight hundred sixty-one

_____ = _____ thousands + _____ hundreds + _____ tens + _____ ones

five thousand, six hundred eight

_____ = _____ thousands + _____ hundreds + _____ tens + _____ ones

nine thousand, four hundred twenty-seven

_____ = _____ thousands + _____ hundreds + _____ tens + _____ ones

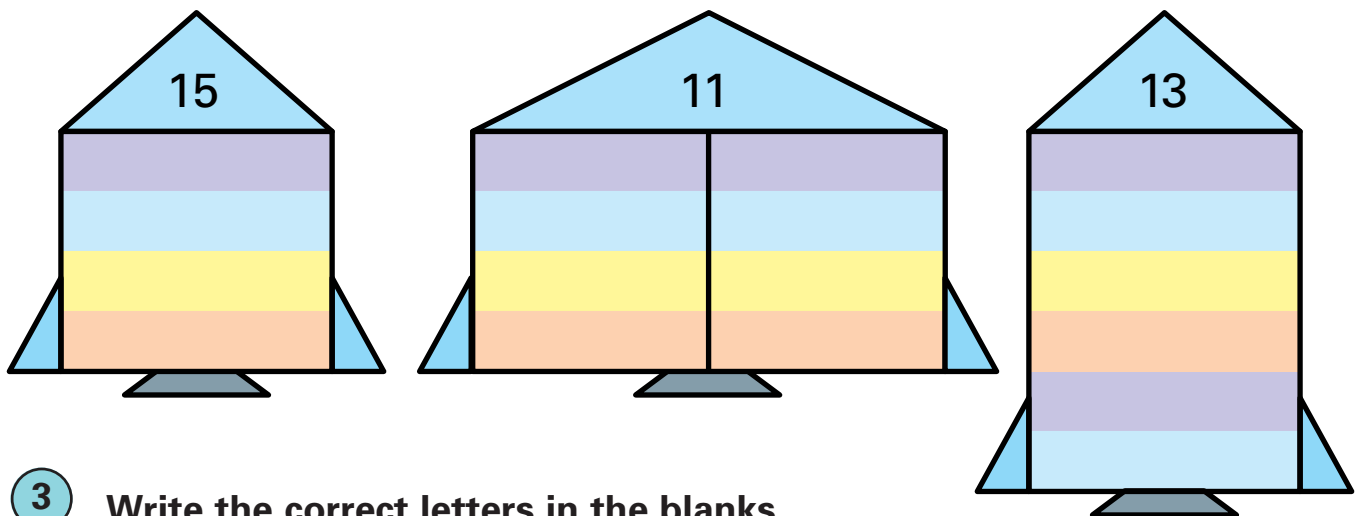
two thousand, thirty-five

_____ = _____ thousands + _____ hundreds + _____ tens + _____ ones

six thousand, five hundred forty-nine

_____ = _____ thousands + _____ hundreds + _____ tens + _____ ones

2 Write the addition facts having a sum of:



3 Write the correct letters in the blanks.

_____ ,

5 th O
 19th R
 8 th B
 15th S

16th Y
 2 nd L
 14th I
 7 th Y

13th H
 18th A
 1 st I
 9 th E

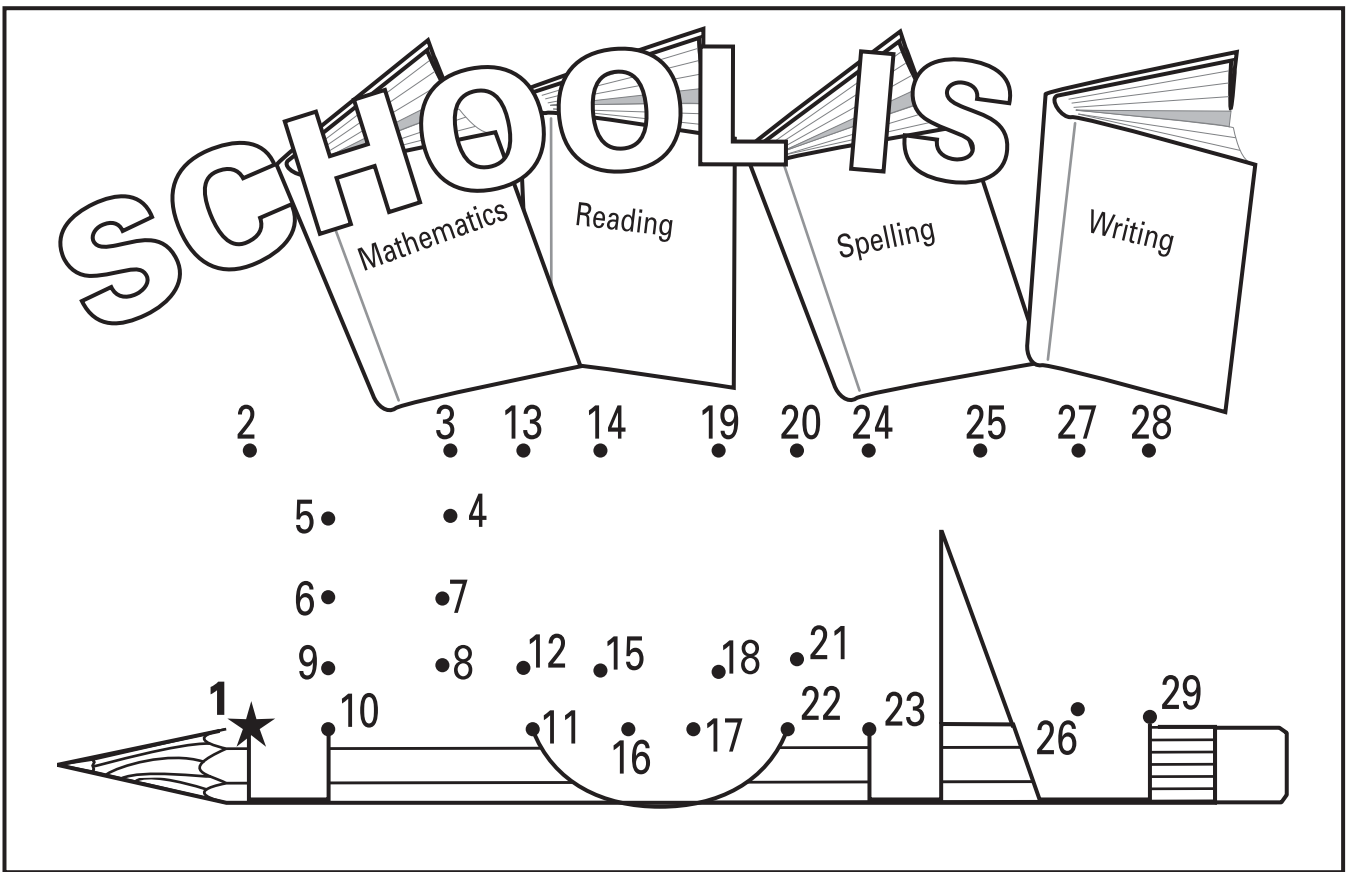
6 th M
 17th E
 4 th D
 11th T

10th S
 3 rd L
 12th T

4 Find the sum.

$\begin{array}{r} 13 \\ + 27 \\ \hline \end{array}$	$\begin{array}{r} 58 \\ + 38 \\ \hline \end{array}$	$\begin{array}{r} 36 \\ + 45 \\ \hline \end{array}$	$\begin{array}{r} 64 \\ + 18 \\ \hline \end{array}$	$\begin{array}{r} 27 \\ + 36 \\ \hline \end{array}$	$\begin{array}{r} 45 \\ + 27 \\ \hline \end{array}$	$\begin{array}{r} 39 \\ + 58 \\ \hline \end{array}$	$\begin{array}{r} 29 \\ + 23 \\ \hline \end{array}$
$\begin{array}{r} 42 \\ + 48 \\ \hline \end{array}$	$\begin{array}{r} 14 \\ + 57 \\ \hline \end{array}$	$\begin{array}{r} 36 \\ + 28 \\ \hline \end{array}$	$\begin{array}{r} 29 \\ + 66 \\ \hline \end{array}$	$\begin{array}{r} 35 \\ + 36 \\ \hline \end{array}$	$\begin{array}{r} 57 \\ + 18 \\ \hline \end{array}$	$\begin{array}{r} 68 \\ + 25 \\ \hline \end{array}$	$\begin{array}{r} 79 \\ + 12 \\ \hline \end{array}$

5 Connect the dots.



6 Find the difference.

$\begin{array}{r} 79 \\ - 69 \\ \hline \end{array}$	$\begin{array}{r} 53 \\ - 51 \\ \hline \end{array}$	$\begin{array}{r} 68 \\ - 20 \\ \hline \end{array}$	$\begin{array}{r} 94 \\ - 30 \\ \hline \end{array}$	$\begin{array}{r} 95 \\ - 84 \\ \hline \end{array}$	$\begin{array}{r} 37 \\ - 27 \\ \hline \end{array}$	$\begin{array}{r} 86 \\ - 25 \\ \hline \end{array}$	$\begin{array}{r} 73 \\ - 43 \\ \hline \end{array}$
$\begin{array}{r} 48 \\ - 21 \\ \hline \end{array}$	$\begin{array}{r} 65 \\ - 12 \\ \hline \end{array}$	$\begin{array}{r} 94 \\ - 61 \\ \hline \end{array}$	$\begin{array}{r} 56 \\ - 34 \\ \hline \end{array}$	$\begin{array}{r} 82 \\ - 30 \\ \hline \end{array}$	$\begin{array}{r} 69 \\ - 37 \\ \hline \end{array}$	$\begin{array}{r} 27 \\ - 15 \\ \hline \end{array}$	$\begin{array}{r} 87 \\ - 62 \\ \hline \end{array}$

1 Match the numbers.

23rd	fortieth	483	three hundred twenty-seven
86th	seventy-fifth	609	six hundred ninety
40th	twenty-third	572	five hundred seventy-two
57th	eighty-sixth	327	four hundred eighty-three
31st	ninety-second	690	eight hundred thirty-eight
75th	fifty-seventh	838	six hundred nine
92nd	thirty-first	250	two hundred fifty

2 Write the numbers in expanded and standard form.

four thousand, three hundred twenty-five

$$4 \text{ thousands} + 3 \text{ hundreds} + 2 \text{ tens} + 5 \text{ ones} = \underline{\quad} + \underline{\quad} + \underline{\quad} + \underline{\quad} = \underline{\quad}$$

seven thousand, two hundred six

$$7 \text{ thousands} + 2 \text{ hundreds} + 0 \text{ tens} + 6 \text{ ones} = \underline{\quad} + \underline{\quad} + \underline{\quad} + \underline{\quad} = \underline{\quad}$$

one thousand, eight hundred forty-three

$$1 \text{ thousand} + 8 \text{ hundreds} + 4 \text{ tens} + 3 \text{ ones} = \underline{\quad} + \underline{\quad} + \underline{\quad} + \underline{\quad} = \underline{\quad}$$

eight thousand, seventy-one

$$8 \text{ thousands} + 0 \text{ hundreds} + 7 \text{ tens} + 1 \text{ one} = \underline{\quad} + \underline{\quad} + \underline{\quad} + \underline{\quad} = \underline{\quad}$$

five thousand, six hundred ninety-two

$$5 \text{ thousands} + 6 \text{ hundreds} + 9 \text{ tens} + 2 \text{ ones} = \underline{\quad} + \underline{\quad} + \underline{\quad} + \underline{\quad} = \underline{\quad}$$

3 Find the sum.

$\begin{array}{r} 84 \\ + 90 \\ \hline \end{array}$	$\begin{array}{r} 98 \\ + 11 \\ \hline \end{array}$	$\begin{array}{r} 80 \\ + 23 \\ \hline \end{array}$	$\begin{array}{r} 94 \\ + 75 \\ \hline \end{array}$	$\begin{array}{r} 73 \\ + 56 \\ \hline \end{array}$	$\begin{array}{r} 61 \\ + 97 \\ \hline \end{array}$	$\begin{array}{r} 82 \\ + 45 \\ \hline \end{array}$	$\begin{array}{r} 53 \\ + 51 \\ \hline \end{array}$
---	---	---	---	---	---	---	---

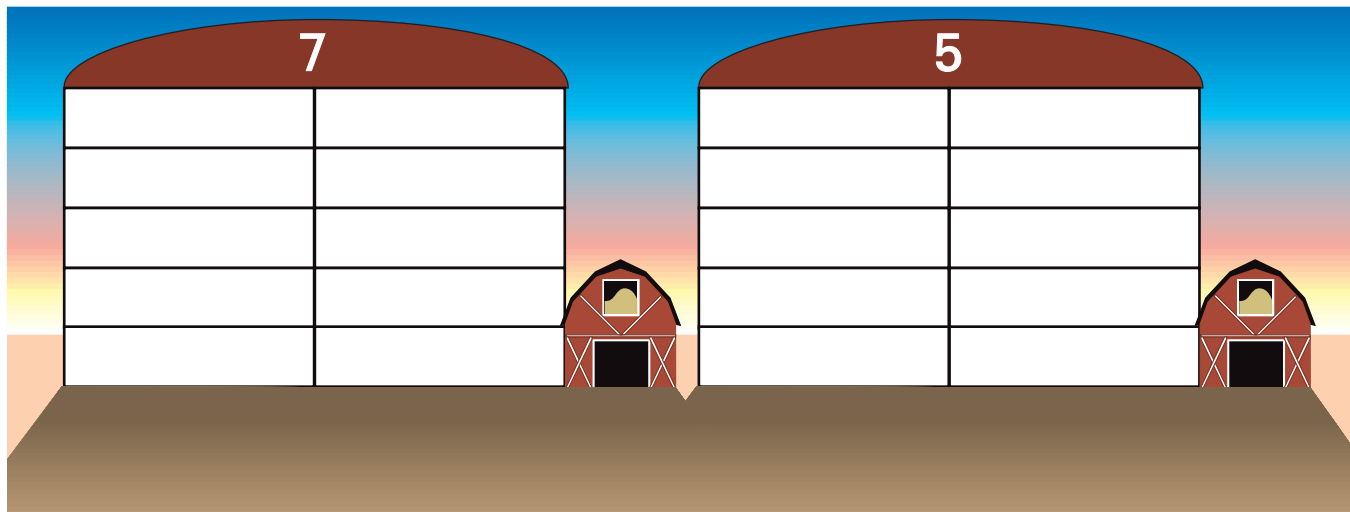
$\begin{array}{r} 92 \\ + 50 \\ \hline \end{array}$	$\begin{array}{r} 62 \\ + 47 \\ \hline \end{array}$	$\begin{array}{r} 81 \\ + 34 \\ \hline \end{array}$	$\begin{array}{r} 86 \\ + 73 \\ \hline \end{array}$	$\begin{array}{r} 72 \\ + 34 \\ \hline \end{array}$	$\begin{array}{r} 67 \\ + 60 \\ \hline \end{array}$	$\begin{array}{r} 94 \\ + 31 \\ \hline \end{array}$	$\begin{array}{r} 81 \\ + 66 \\ \hline \end{array}$
---	---	---	---	---	---	---	---

4 Find the difference.

89 $- 85$	76 $- 36$	78 $- 56$	58 $- 17$	63 $- 22$	94 $- 24$	18 $- 15$	45 $- 23$
----------------	----------------	----------------	----------------	----------------	----------------	----------------	----------------

96 $- 73$	89 $- 30$	47 $- 31$	99 $- 49$	74 $- 61$	82 $- 42$	69 $- 41$	57 $- 50$
----------------	----------------	----------------	----------------	----------------	----------------	----------------	----------------

5 Write the subtraction facts having a difference of:



6

1	2			4	5	6
7			8		9	
		10				
11	12				13	14
15				16		

Across

- $74 + 83$
- 6 hundreds + 4 tens + 7 ones
- 6 tens
- $70 - 50$
- three hundred seven
- $65 - 10$
- 2 tens + 4 ones
- $98 + 46$
- eight hundred fifty-one


Down

- | | | |
|--------------------|--------------------|-----------------|
| 1. $59 - 43$ | 6. 7 tens | 12. $32 + 22$ |
| 2. $32 + \quad 18$ | 8. 5 hundreds | 13. twenty-five |
| 5. 4 tens + 2 ones | 11. 5 tens + 1 one | 14. $87 - 46$ |









1 Circle the closer ten.

29	20	30
32	30	40
86	80	90
51	50	60
97	90	100
48	40	50
73	70	80
14	10	20

38	30	40
92	90	100
63	60	70
84	80	90
77	70	80
59	50	60
41	40	50
16	10	20



2 Write the correct time.



During the morning the time is (A.M. or P.M.)? _____

During the afternoon the time is (A.M. or P.M.)? _____

3 Find the sum.

$\begin{array}{r} 81 \\ + 49 \\ \hline \end{array}$	$\begin{array}{r} 67 \\ + 89 \\ \hline \end{array}$	$\begin{array}{r} 86 \\ + 84 \\ \hline \end{array}$	$\begin{array}{r} 96 \\ + 47 \\ \hline \end{array}$	$\begin{array}{r} 45 \\ + 75 \\ \hline \end{array}$	$\begin{array}{r} 53 \\ + 68 \\ \hline \end{array}$	$\begin{array}{r} 42 \\ + 68 \\ \hline \end{array}$	$\begin{array}{r} 98 \\ + 76 \\ \hline \end{array}$
---	---	---	---	---	---	---	---

$\begin{array}{r} 73 \\ + 59 \\ \hline \end{array}$	$\begin{array}{r} 57 \\ + 93 \\ \hline \end{array}$	$\begin{array}{r} 76 \\ + 86 \\ \hline \end{array}$	$\begin{array}{r} 28 \\ + 95 \\ \hline \end{array}$	$\begin{array}{r} 97 \\ + 87 \\ \hline \end{array}$	$\begin{array}{r} 89 \\ + 23 \\ \hline \end{array}$	$\begin{array}{r} 87 \\ + 94 \\ \hline \end{array}$	$\begin{array}{r} 53 \\ + 77 \\ \hline \end{array}$
---	---	---	---	---	---	---	---

4 Write the numbers in standard form.

two thousand, three hundred fifty-eight

$$2 \text{ thousands} + 3 \text{ hundreds} + 5 \text{ tens} + 8 \text{ ones} = \underline{\hspace{2cm}}$$

six thousand, seven hundred four

$$6 \text{ thousands} + 7 \text{ hundreds} + 0 \text{ tens} + 4 \text{ ones} = \underline{\hspace{2cm}}$$

nine thousand, one hundred ninety


$$9 \text{ thousands} + 1 \text{ hundred} + 9 \text{ tens} + 0 \text{ ones} = \underline{\hspace{2cm}}$$

five thousand, eight hundred twenty-seven

$$5 \text{ thousands} + 8 \text{ hundreds} + 2 \text{ tens} + 7 \text{ ones} = \underline{\hspace{2cm}}$$

three thousand, sixty-nine

$$3 \text{ thousands} + 0 \text{ hundreds} + 6 \text{ tens} + 9 \text{ ones} = \underline{\hspace{2cm}}$$



5 Match the numbers.

484	four hundred eighty	408	four hundred forty-four
480	eight hundred forty	880	eight hundred forty-eight
804	eight hundred eighty-four	440	four hundred eight
844	four hundred eighty-four	444	eight hundred eighty-eight
840	four hundred four	848	eight hundred eighty
448	eight hundred forty-four	488	eight hundred eight
404	eight hundred four	888	four hundred eighty-eight
884	four hundred forty-eight	808	four hundred forty

6 Find the difference.

$\begin{array}{r} 87 \\ - 17 \\ \hline \end{array}$	$\begin{array}{r} 49 \\ - 48 \\ \hline \end{array}$	$\begin{array}{r} 28 \\ - 14 \\ \hline \end{array}$	$\begin{array}{r} 87 \\ - 54 \\ \hline \end{array}$	$\begin{array}{r} 37 \\ - 12 \\ \hline \end{array}$	$\begin{array}{r} 28 \\ - 22 \\ \hline \end{array}$	$\begin{array}{r} 59 \\ - 43 \\ \hline \end{array}$	$\begin{array}{r} 95 \\ - 42 \\ \hline \end{array}$
$\begin{array}{r} 73 \\ - 13 \\ \hline \end{array}$	$\begin{array}{r} 86 \\ - 85 \\ \hline \end{array}$	$\begin{array}{r} 76 \\ - 36 \\ \hline \end{array}$	$\begin{array}{r} 94 \\ - 53 \\ \hline \end{array}$	$\begin{array}{r} 58 \\ - 17 \\ \hline \end{array}$	$\begin{array}{r} 19 \\ - 16 \\ \hline \end{array}$	$\begin{array}{r} 69 \\ - 12 \\ \hline \end{array}$	$\begin{array}{r} 98 \\ - 10 \\ \hline \end{array}$