



**ASSESSMENT GUIDE**
NUMBERS TO 10**Section A Multiple-Choice Questions**

(Questions 1 to 3: 2 points each)

1. How many frogs are there?



- (A) 4 (B) 5 (C) 9 (D) 10

2. What are the two missing numbers?



- (A) 4, 3 (B) 4, 1 (C) 5, 0 (D) 4, 0

3. Lydia is thinking of a number.
The number is greater than 4, but less than 9.
Which **cannot** be the number?

- (A) 7 (B) 5 (C) 9 (D) 6

7. Which of these is false?


(A) $4 + 5 = 9$

(B) $5 - 4 = 9$

(C) $9 - 4 = 5$

(D) $9 - 5 = 4$

8. Which equation best describes the picture?



(A) $10 - 0 = 10$

(B) $5 + 5 = 10$


(C) $4 + 6 = 10$

(D) $2 + 8 = 10$

9. Ryan has 7 buttons.

Sarah has 3 fewer buttons than Ryan.

How many buttons does Sarah have?



Ryan



Sarah

(A) 4

(B) 5

(C) 9

(D) 10

10. What is the missing number?

_____ + 6 = 10 - 2

(A) 0

(B) 1

(C) 2

(D) 3

**ASSESSMENT GUIDE**
LENGTH**Section A Multiple-Choice Questions**

(Questions 1 to 3: 2 points each)

1. The bar of soap is about _____  long.



- (A) 5
- (B) 6
- (C) 7
- (D) 8

2. The length of a toy jeep is about _____  long.



- Ⓐ 6
Ⓑ 7
Ⓒ 9
Ⓓ 10

Section B Short Answer Questions

(Questions 4 to 6: 2 points each)

4. Look at the picture.
Fill in the blanks.


Crayon A



Crayon B



Crayon C



- a Crayon _____ is the longest.
b Crayon _____ is the shortest.

5. Look at the picture.
Fill in the blank.

Yarn A



Yarn B



Yarn C




Yarn _____ is the longest.

4. Which shape is **not** closed?

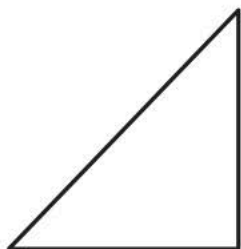
(A)



(B)



(C)



(D)

