

Sample Pages from



Thanks for checking us out. Please call us at 877-777-3450 with questions or feedback, or to order this product. You can also order this product online at [www.tcmpub.com/shell-education](http://www.tcmpub.com/shell-education).

For correlations to State Standards, please visit:

[www.tcmpub.com/teachers/correlations](http://www.tcmpub.com/teachers/correlations)

Shell Professional and Strategy Resources:

[www.tcmpub.com/teachers/professional-resources/correlations](http://www.tcmpub.com/teachers/professional-resources/correlations)

To **Create** a **World** in which  
**Children** Love to **Learn!**

877-777-3450 • [www.tcmpub.com/shell-education](http://www.tcmpub.com/shell-education)



# Summer Blast

Getting Ready for  
**First Grade**

**Reading**

**Math**

**Writing**

**Art**

**Puzzles**

**and more!**



# Table of Contents

## Introduction

Welcome Letter .....	4
Helpful Family Resources .....	5

## Weekly Activities

Week 1 Activities .....	13
Week 2 Activities .....	23
Week 3 Activities .....	33
Week 4 Activities .....	43
Week 5 Activities .....	53
Week 6 Activities .....	63
Week 7 Activities .....	73
Week 8 Activities .....	83
Week 9 Activities .....	93

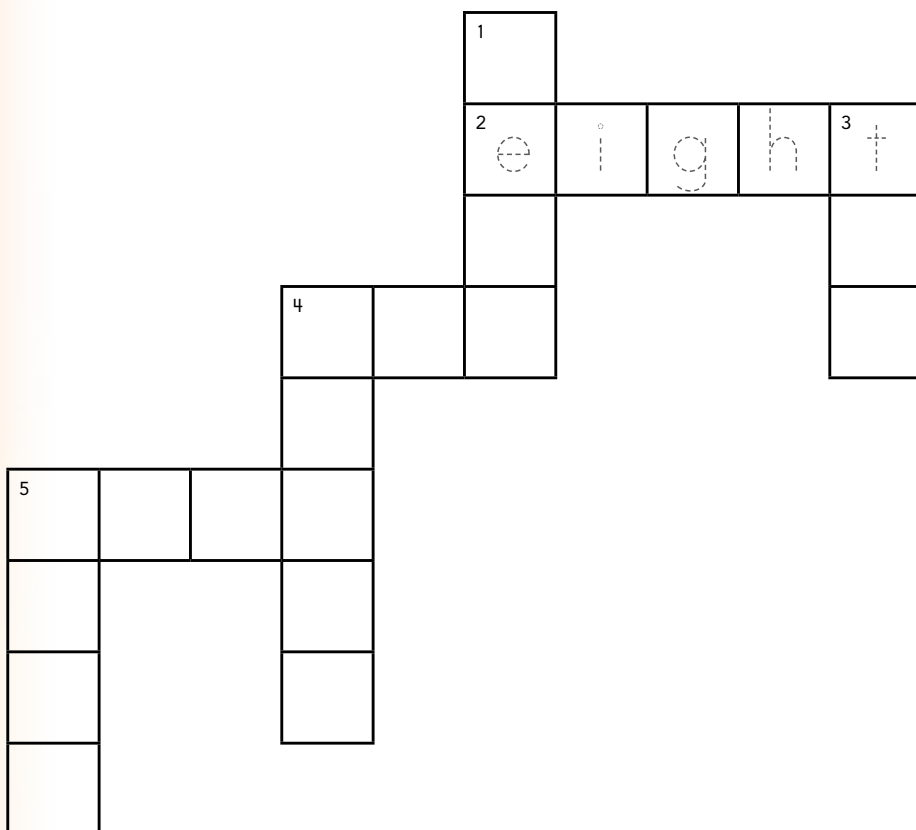
## Appendices

Appendix A: Activity Cards .....	103
Appendix B: Answer Key .....	119
Appendix C: Parent Handbook .....	123



# Number Crossword


**Directions:** Solve the clues. Complete the crossword puzzle using the Answer Box.




## Answer Box

zero (0)  
four (4)  
eight (8)  
five (5)  
two (2)  
ten (10)  
three (3)

### Across

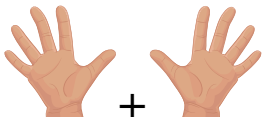

2  = 8 legs


4  = 2 leaves

5  = 4

### Down

1  = 2 boots

3  +  = 10 fingers

4  = 3 bears

5 eight - three = 5

# Shape Hunt

**Directions:** Find an example in your house of each shape. Draw a picture of what you find.


1 sphere



2 cone



3 rectangular prism




4 cylinder



5 pyramid



6 cube




## How Much Fruit?

Kevin is buying fruit. He buys 12 bananas. He already has 8 apples at home. He wants to have an equal number of bananas and apples. How many apples should he buy?



**Show It:** Draw a picture showing the problem.



**Solve It:** Write a number sentence.




**Explain It:** Explain how you solved the problem.



## More Than One?


**Directions:** Circle the right words for the problem.

1




bed      beds

2




apple      apples

3



can      cans

4



nut      nuts